

Plusaufgaben

1. Verdoppeln



5			$5 + 5 = 10$
9			
7			

$12 + 2 = \underline{\quad}$

$4 + 4 = \underline{\quad}$

$6 + 6 = \underline{\quad}$

$8 + 8 = \underline{\quad}$

$3 + 3 = \underline{\quad}$

$9 + 9 = \underline{\quad}$

2. Schlaue Päckchen



$6 + 5 = \underline{\quad}$

$8 + 3 = \underline{\quad}$

$7 + 4 = \underline{\quad}$

$6 + 6 = \underline{\quad}$

$10 + 3 = \underline{\quad}$

$8 + 5 = \underline{\quad}$

$6 + 7 = \underline{\quad}$

$12 + 3 = \underline{\quad}$

$9 + 6 = \underline{\quad}$

$\underline{\quad} + \underline{\quad} = \underline{\quad}$

$\underline{\quad} + 3 = \underline{\quad}$

$\underline{\quad} + 7 = \underline{\quad}$

3. Tauschaufgaben



$7 + 5 = \underline{\quad}$

$4 + 8 = \underline{\quad}$

$3 + 6 = \underline{\quad}$

$5 + 7 = \underline{\quad}$

$\underline{\quad} + \underline{\quad} = \underline{\quad}$

$\underline{\quad} + \underline{\quad} = \underline{\quad}$

$7 + 3 = \underline{\quad}$

$9 + 3 = \underline{\quad}$

$5 + 9 = \underline{\quad}$

$\underline{\quad} + \underline{\quad} = \underline{\quad}$

$\underline{\quad} + \underline{\quad} = \underline{\quad}$

$\underline{\quad} + \underline{\quad} = \underline{\quad}$

$0 + 7 = \underline{\quad}$

$5 + 5 = \underline{\quad}$

$\underline{\quad} + \underline{\quad} = \underline{\quad}$

$\underline{\quad} + \underline{\quad} = \underline{\quad}$

/6

4. Rechnungen zu Bildern finden.



Diese Aufgabe machst du mündlich bei deiner Lehrerin/deinem Lehrer.

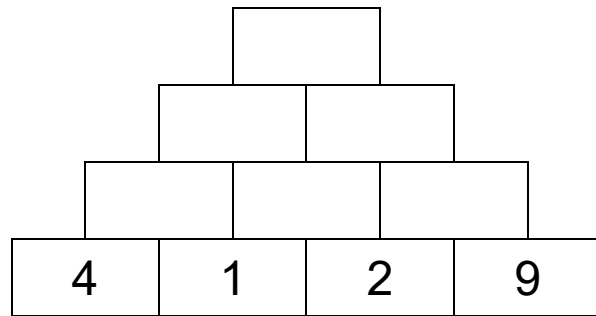
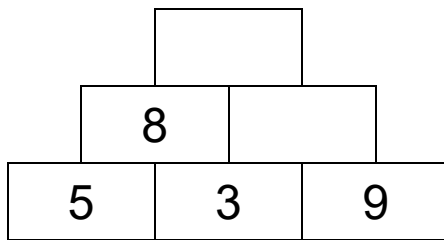
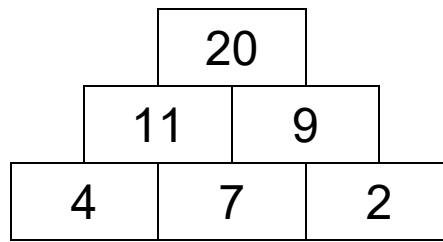


Quelle: *Mein kleines Wimmelbuch: im Zoo*
von Guido Wandrey

/12

5. Zahlenmauern

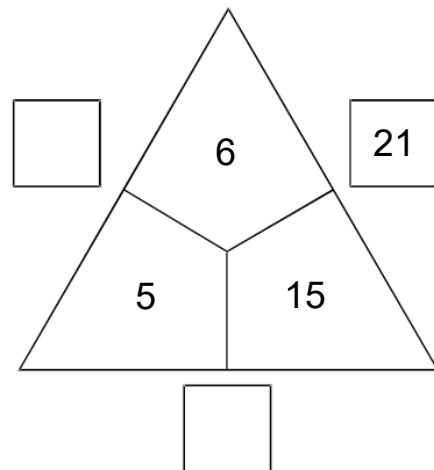
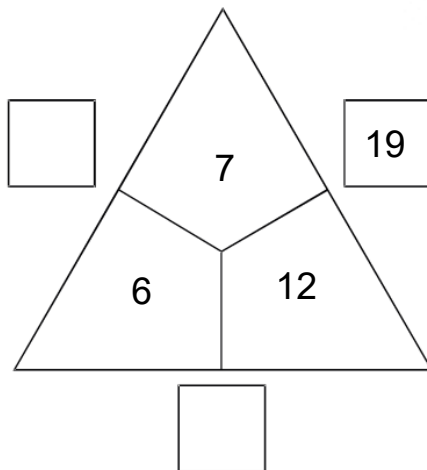
★★



/4

6. Rechendreiecke

★★



/4

Punkte: _____ / 42	Unterschrift:
--------------------	---------------