



Plus und Minus bis 20


1. Addieren



$$\underline{\quad} + \underline{\quad} = \underline{\quad}$$



$$\underline{\quad} + \underline{\quad} = \underline{\quad}$$



$$\underline{\quad} + \underline{\quad} = \underline{\quad}$$

/3

2. Verdoppeln



$$6 + 6 = \underline{\quad}$$

$$4 + 4 = \underline{\quad}$$

$$7 + 7 = \underline{\quad}$$

$$9 + 9 = \underline{\quad}$$

$$3 + 3 = \underline{\quad}$$

$$5 + 5 = \underline{\quad}$$

$$2 + 2 = \underline{\quad}$$

$$10 + 10 = \underline{\quad}$$

$$8 + 8 = \underline{\quad}$$

/9

3. Plusaufgaben verändern



$$4 + 2 = \underline{\quad}$$

$$2 + 2 = \underline{\quad}$$

$$3 + 5 = \underline{\quad}$$

$$4 + 3 = \underline{\quad}$$

$$3 + 3 = \underline{\quad}$$

$$4 + 6 = \underline{\quad}$$

$$4 + 4 = \underline{\quad}$$

$$4 + 4 = \underline{\quad}$$

$$5 + 7 = \underline{\quad}$$

$$4 + \underline{\quad} = \underline{\quad}$$

$$5 + \underline{\quad} = \underline{\quad}$$

$$6 + \underline{\quad} = \underline{\quad}$$

$$\underline{\quad} + \underline{\quad} = \underline{\quad}$$

$$\underline{\quad} + \underline{\quad} = \underline{\quad}$$

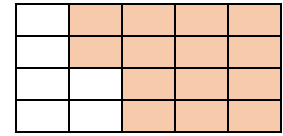
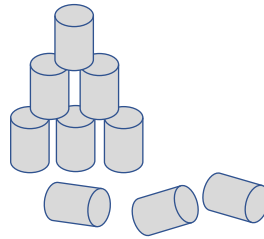
$$\underline{\quad} + \underline{\quad} = \underline{\quad}$$

/12

4. Subtrahieren



Bild von [katipcreations](#) auf [Pixabay](#)



$$8 - \underline{\quad} = \underline{\quad}$$

$$9 - \underline{\quad} = \underline{\quad}$$

$$20 - \underline{\quad} = \underline{\quad}$$

/3

5. Minusaufgaben verändern



$$7 - 4 = \underline{\quad}$$

$$17 - 5 = \underline{\quad}$$

$$12 - 0 = \underline{\quad}$$

$$7 - 3 = \underline{\quad}$$

$$17 - 6 = \underline{\quad}$$

$$13 - 1 = \underline{\quad}$$

$$7 - 2 = \underline{\quad}$$

$$17 - 7 = \underline{\quad}$$

$$14 - 2 = \underline{\quad}$$

$$7 - 1 = \underline{\quad}$$

$$17 - 8 = \underline{\quad}$$

$$15 - 3 = \underline{\quad}$$

/12

6. Addieren



$$\underline{\quad} + \underline{\quad} + \underline{\quad} = \underline{\quad}$$



$$\underline{\quad} + \underline{\quad} + \underline{\quad} = \underline{\quad}$$



$$\underline{\quad} + \underline{\quad} + \underline{\quad} = \underline{\quad}$$

/3

7. Minusaufgaben verändern

★★

$6 - 5 = \underline{\quad}$

$15 - 0 = \underline{\quad}$

$13 - 7 = \underline{\quad}$

$8 - 4 = \underline{\quad}$

$14 - 1 = \underline{\quad}$

$11 - 6 = \underline{\quad}$

$10 - 3 = \underline{\quad}$

$13 - 2 = \underline{\quad}$

$9 - 5 = \underline{\quad}$

$\underline{\quad} - \underline{\quad} = \underline{\quad}$

$\underline{\quad} - \underline{\quad} = \underline{\quad}$

$\underline{\quad} - \underline{\quad} = \underline{\quad}$

$\underline{\quad} - \underline{\quad} = \underline{\quad}$

$\underline{\quad} - \underline{\quad} = \underline{\quad}$

$\underline{\quad} - \underline{\quad} = \underline{\quad}$

/15

8. Sachaufgaben

★★

a) Kai hat 7 Franken. Mama gibt 8 Franken dazu.

Zusammen Franken.

b) 13 Äpfel. Der Affe frisst 5.

Es bleiben Äpfel.

/2

9. Rechnungen zu Bildern finden

★★★

Diese Aufgabe machst du mündlich bei deiner Lehrerin/deinem Lehrer.

Quelle: Mein kleines Wimmelbuch: im Zoo von Guido Wandrey

/6

Punkte: / 65

Unterschrift: