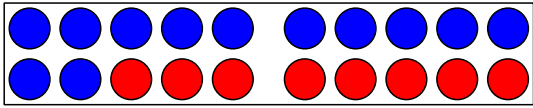
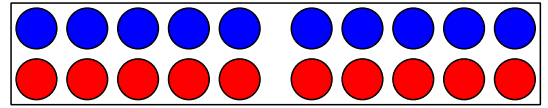


Immer 20

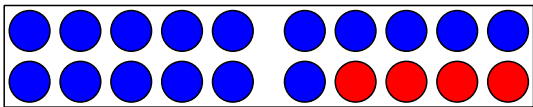
Schreibe die passende Rechnung zum Punktefeld.



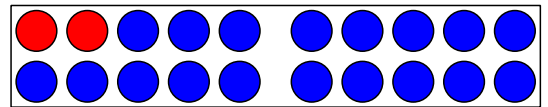
_____ + _____ = _____



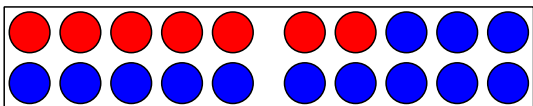
_____ + _____ = _____



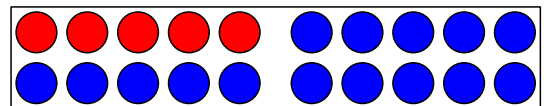
_____ + _____ = _____



_____ + _____ = _____

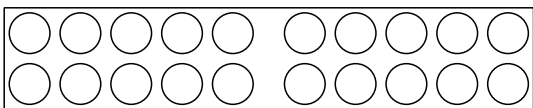


_____ + _____ = _____

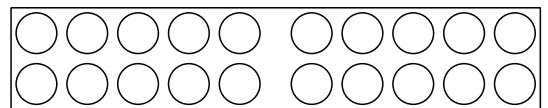


_____ + _____ = _____

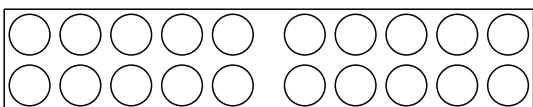
Erfinde eigene Rechnungen!



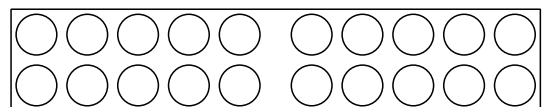
_____ + _____ = _____



_____ + _____ = _____



_____ + _____ = _____

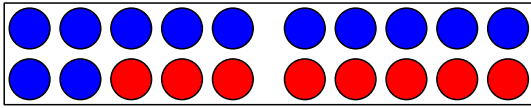


_____ + _____ = _____

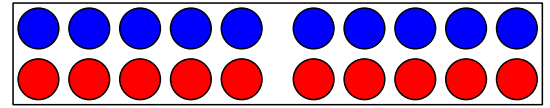
Immer 20

LÖSUNG

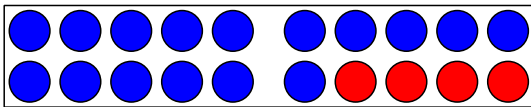
Schreibe die passende Rechnung zum Punktefeld.



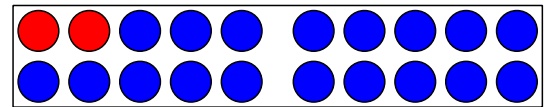
$$12 + 8 = 20$$



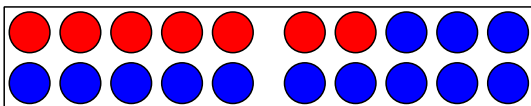
$$10 + 10 = 20$$



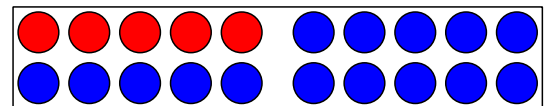
$$16 + 4 = 20$$



$$2 + 18 = 20$$

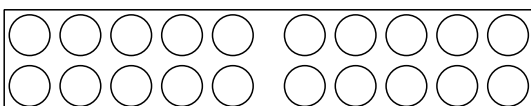


$$7 + 13 = 20$$

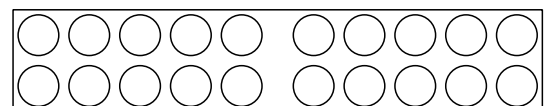


$$5 + 15 = 20$$

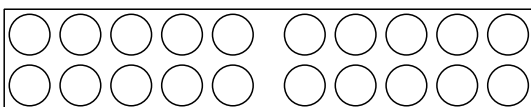
Erfinde eigene Rechnungen!



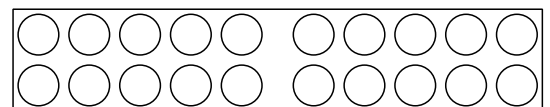
$$\underline{\quad} + \underline{\quad} = \underline{\quad}$$



$$\underline{\quad} + \underline{\quad} = \underline{\quad}$$



$$\underline{\quad} + \underline{\quad} = \underline{\quad}$$



$$\underline{\quad} + \underline{\quad} = \underline{\quad}$$