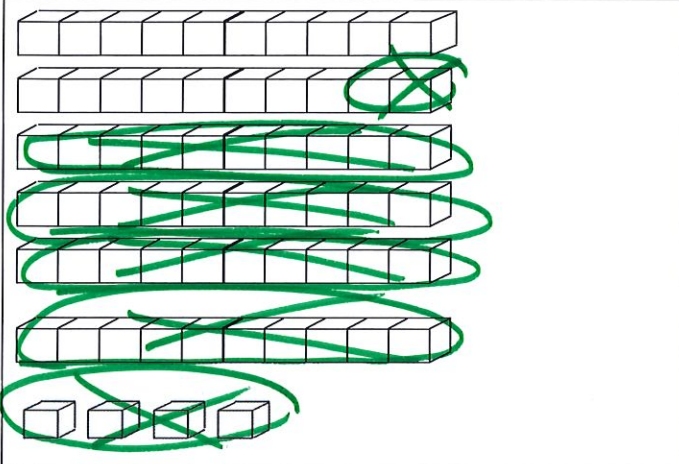
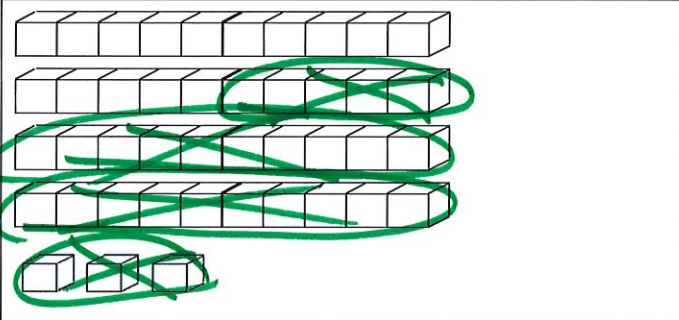
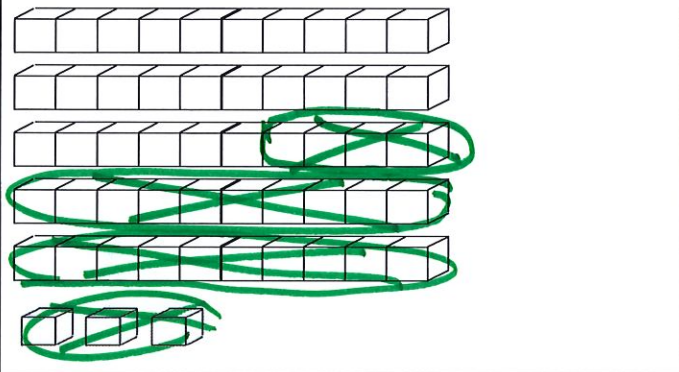
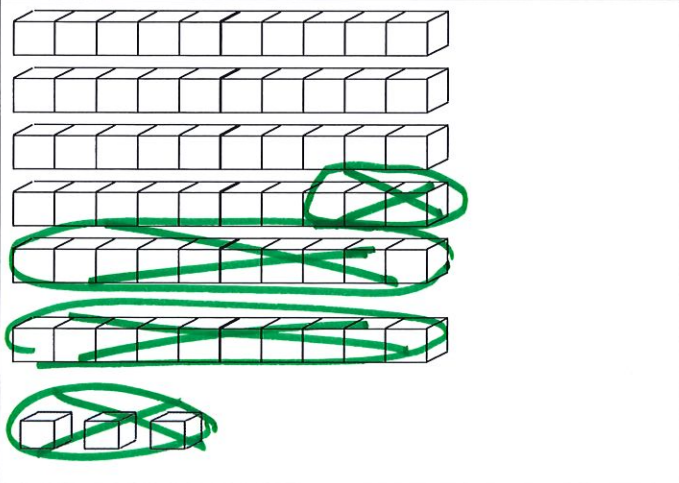



LÖSUNG

Rechenweg bei der Subtraktion

Zeichne links deinen Rechenweg auf und schreibe rechts die Rechnungen dazu.

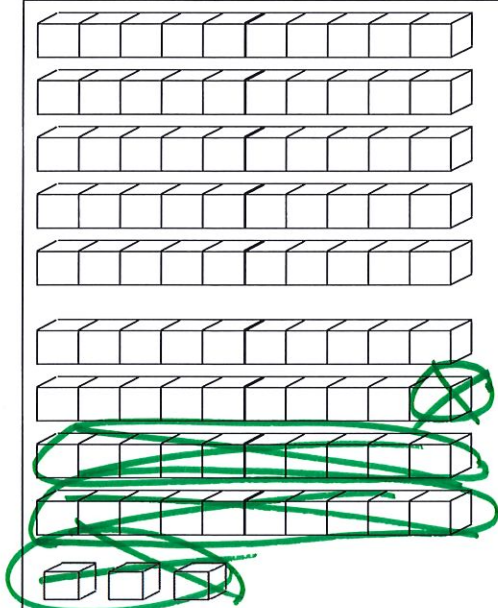
	$64 - 46 = 18$ $64 - 40 = 24$ $24 - 6 = 18$
	$43 - 28 = 15$ $43 - 20 = 23$ $23 - 8 = 15$
	$53 - 27 = 26$ $53 - 20 = 33$ $33 - 7 = 26$
	$63 - 26 = 37$ $63 - 20 = 43$ $43 - 6 = 37$



$$73 - 25 = 48$$

$$73 - 20 = 53$$

$$53 - 5 = 48$$



$$93 - 24 = 69$$

$$93 - 20 = 73$$

$$73 - 4 = 69$$